

DOWNLOAD PDF DOCUMENT



HOLT ENVIRONMENTAL SCIE...

DOWNLOAD DOCUMENT NOW

Updated: 10/19/2017

DISCLAIMER:

CHAUVIN.CO uses the following holt environmental science chapter 12 test answers book available for free PDF download which is also related with

HOLT ENVIRONMENTAL SCIENCE CHAPTER 12 TEST ANSWERS

There are cases when you need holt environmental science chapter 12 test answers instantly and have no site to download it from. We can provide you for an opportunity to get as many eBooks as you need and all for free. We offer an access to a rich collection of files in PDF format that are easy to download. You don't need to pay either for holt environmental science chapter 12 test answers or other books. This is a unique opportunity. We ask you to pass a registration by following the link and answering simple questions. Then you will get an access to holt environmental science chapter 12 test answers and can download this file and other data without paying for it. We ask you to pass the registration because of endless hackers' attacks that deface our website. When you register, you get a unique access to holt environmental science chapter 12 test answers and other files, so that bots cannot do harm. So, if you need holt environmental science chapter 12 test answers right now, you will get it after simple registration.

DOWNLOAD NOW

DOWNLOAD PDF DOCUMENT

DOWNLOAD PDF DOCUMENT

HOLT ENVIRONMENTAL SCIE...

[MICROSOFT WORD - CHAPTER 2 TEST REVIEW ANSWERS.DOCX](#)

Honors Geometry Chapter 2 Test Review Question Answers 1. Given: $BA \perp AT$ $(51 - x) + (y + 9) = 180$ Find: $m\angle MAT$ $y = 120 + x$ $(y + 9) + (x + y) = 90$ $B \perp x + 2y = 81$ $x + 2(120 + x) = 81$ $x + 240 + 2x = 81$ $3x = -159$ M $51 - x + y + 9 = 180$ A $x + y = 120$ $T \perp y = 120 + (-53) = 67$ $m\angle MAT = 180 - (x + y) = 180 - 14 = 166$ 2. A certain angle is 39 less than 2 times its complement. Find its supplement. $x = 2(90 - x) - 39$

File name: Chapter 2 Test Review Answers.pdf

[Download now or Read Online](#)

[MICROSOFT WORD - CHAPTER 11 TEST REVIEW QUESTION ANSWERS.DOCX](#)

Honors Geometry Chapter 11 Test Review Question Answers 1. Find the area of an equilateral triangle that has sides that measure 8 7 . $s = 8.7$ $A_{\text{Equ.}} = \frac{\sqrt{3}}{4} s^2 = \frac{\sqrt{3}}{4} (8.7)^2 \approx 31.448$ 3. $\frac{1}{2} (11.2 + 3) (4.4 - 2) = 11.2$ 2. A rotor of a Wankel automotive engine has the geometric shape shown. The center of each arc is the opposite vertex of the equilateral triangle. a. Find the figure's area a. $A = A_{\text{triangle}} + 3(A_{\text{segment}})$ b. Find the figur...

File name: Chapter 11 Test Review Question Answers.pdf

[Download now or Read Online](#)

[EXAMVIEW - CHAPTER 14 TEST REVIEW- WILLIAMS.TST](#)

Name: Period: Date: K. Williams ID: A8th Grade Chapter 14 TEST REVIEW 1. Determine the volume of the cylinder. Use 3.14 for π . 2. Complete the table to identify the effect tripling the radius of a cylinder's base has on its volume.

Cylinder radius (cm)	Cylinder Area of Base (πr^2 (cm ²))	Cylinder Height (cm)	Cylinder Volume ($V = \pi r^2 h$ (cm ³))
1	3.14	1	3.14
3	28.26	1	28.26
9	254.34	1	254.34

 3. Identify the radius, diameter, and height ...

File name: ExamView - Chapter 14 Test Review- Williams.pdf

[Download now or Read Online](#)

[MICROSOFT WORD - ENVIRONMENTAL SCIENCE \(NEW\).DOC](#)

CARIBBEAN EXAMINATIONS COUNCIL Caribbean Advanced Proficiency Examinations CAPE ENVIRONMENTAL SCIENCE SYLLABUS Effective for examinations from May/June 2011 CXC A25 U2/10 Published by the Caribbean Examinations Council 2010, Caribbean Examinations Council All rights reserved. No part of this publication may be reproduced, stored in a retrieval system, or transmitted in any form, or by any means elec...

File name: CAPE Environmental Science.pdf





















[Download now or Read Online](#)

DOWNLOAD PDF DOCUMENT

DOWNLOAD PDF DOCUMENT

Here below another book similar with:

HOLT ENVIRONMENTAL SCIE...

-  [holt environmental science chapter 2 resource file tools of environmental science](#)
-  [holt environmental science assessment chapter test answers](#)
-  [holt environmental science chapter 12 test answers](#)
-  [pearson environmental science test answers chapter three](#)
-  [holt environmental science quiz answers](#)
-  [holt environmental science food and agriculture answers](#)
-  [holt environmental science teacher resources](#)
-  [holt science spectrum physical science chapter 17 resource file electricity](#)
-  [holt physical science chapter six review answers](#)
-  [holt mcdougal space science chapter review answers](#)
-  [solutions holt modern chemistry chapter test answers](#)
-  [holt mcdougal geography chapter 2 test answers](#)
-  [holt texas environmental guide with answer key](#)
-  [answers for ap environmental science multiple choice](#)
-  [pearson answers for environmental science workbook](#)
-  [mcq in environmental science with solved answers](#)
-  [environmental science short questions and answers](#)
-  [environmental science ch 1 review answers](#)
-  [holt science and technology physical science powerpoints](#)
-  [holt physics chapter 3 test b](#)

DOWNLOAD PDF DOCUMENT