

# DOWNLOAD PDF DOCUMENT



## HOLT PHYSICS TEST ROTAT...

**DOWNLOAD DOCUMENT NOW**

**Updated:** 10/13/2017

---

### **DISCLAIMER:**

CHAUVIN.CO uses the following holt physics test rotational motion answers book available for free PDF download which is also related with

### **HOLT PHYSICS TEST ROTATIONAL MOTION ANSWERS**

holt physics test rotational motion answers can be easily downloaded from our library. Don't you believe? It is completely free. You just have to register on our site - click on the link below and answer simple questions. It will provide you for free access to holt physics test rotational motion answers and other eBooks. We ask you to pass a registration because of hard hackers' attacks that knock out of service our library and prevent our users from downloading holt physics test rotational motion answers as well as other books when it is necessary. When pass the registration, you can be sure of free and unlimited access to holt physics test rotational motion answers and lots of other PDF data. Files can be downloaded on your device when you want. Therefore, if you still need holt physics test rotational motion answers and cannot download it from other sites, register on our site and get a free access to a rich collection of eBooks right now. Save your time and efforts.

---

**DOWNLOAD NOW**

# DOWNLOAD PDF DOCUMENT

# DOWNLOAD PDF DOCUMENT

## HOLT PHYSICS TEST ROTAT...

### [PHYSICS TEST REVIEW LESSON 5](#)

Physics Test Review Lesson 5 Period: Name: Multiple Choice D. 60 degrees. Identify the letter of the choice that best completes the E. 75 degrees. statement or answers the question. 9. A ball thrown in the air will never go as far as physics 1. A vector is a quantity that has ideally would predict because A. speed and direction. A. one can never throw the ball fast enough. B. magnitude and time. B. gr...

**File name:** Physics Test Review Lesson 5.pdf  
[Download now or Read Online](#)

### [MICROSOFT WORD - CHAPTER 11 TEST REVIEW QUESTION ANSWERS.DOCX](#)

Honors Geometry Chapter 11 Test Review Question Answers 1. Find the area of an equilateral triangle that has sides that measure 8 7 . s 2 3 A Equ. = 4 (8 7 ) 2 3 448 3 = = = (112 3 ) u 2 4 4 2. A rotor of a Wankel automotive engine has the geometric shape shown. The center of each arc is the opposite vertex of the equilateral triangle. a. Find the figure s area a. A = A + 3(A Segment) b. Find the figur...

**File name:** Chapter 11 Test Review Question Answers.pdf  
[Download now or Read Online](#)

### [MICROSOFT WORD - MEW CHEM 1031 TEST 1 REVIEW ANSWERS.DOC](#)

1. Which statements include exact numbers? I. Angel Falls in Venezuela is 3212 ft high II. There are nine known planets in the solar system III. There are 1000 mm in 1 m a. II. and III. 2. How many significant figures are in the number 3.0900 x 10<sup>4</sup>? a. 5 3. Give the oxidation number of nitrogen in NH<sub>2</sub>OH a. -14. Identify the reducing agent in the following equation: 8H<sup>+</sup>(aq) + 6Cl<sup>-</sup>(aq) + Sn(s) + 4NO<sub>3</sub>-...

**File name:** MEW Chem 1031 Test 1 review answers.pdf  
[Download now or Read Online](#)

### [WHIPPING BOY TEST QUESTIONS AND ANSWERS - BING](#)

whipping boy test questions and answers pdf FREE PDF DOWNLOAD NOW The Whipping Boy Reading Comprehension Bundle Related searches www readingforcomprehension com the-whipping-boy The Whipping Boy Test Questions The Whipping Boy Reading Comprehension Bundle Workbook Answer Key Key Questions Worksheet Key Questions Answer Key Personality Activity Research The Whipping Boy Answers Whipping Boy Comprehension Q...

**File name:**  
[Download now or Read Online](#)





















# DOWNLOAD PDF DOCUMENT

# DOWNLOAD PDF DOCUMENT

Here below another book similar with:

## HOLT PHYSICS TEST ROTAT...

---

-  [holt physics test rotational motion answers](#)
-  [rotational inertia lab report conclusion](#)
-  [physics and projectile motion multiple choice questions](#)
-  [mastering physics projectile motion](#)
-  [motion test a answers pearson education](#)
-  [holt physics chapter 3 test b](#)
-  [holt physics workbook answers](#)
-  [holt physics thermodynamics section quiz answers](#)
-  [projectile motion review answers](#)
-  [describing motion enrichment answers](#)
-  [chapter 3 two dimensional motion and vectors answers](#)
-  [holt world history the human journey holt world](#)
-  [vector and projectile motion quiz](#)
-  [immigration judge sample motion for continuance](#)
-  [sph3u uniform motion problems answer](#)
-  [measuring motion gizmo answer](#)
-  [human motion tracking matlab](#)
-  [time and motion template excel](#)
-  [lab report projectile motion discussion](#)
-  [motion for continuance form california court kern](#)

# DOWNLOAD PDF DOCUMENT